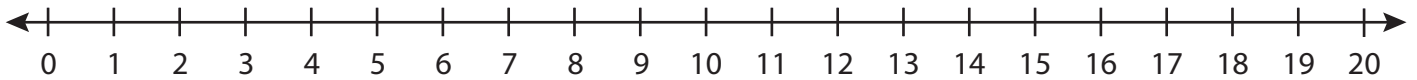


**Number Line Multiplication**

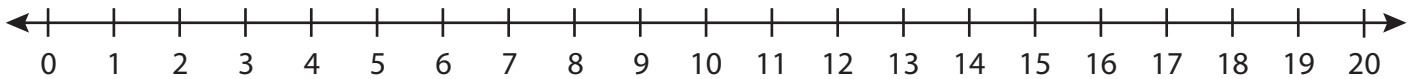
T1S1

Indicate hops on each number line and complete the multiplication sentences.

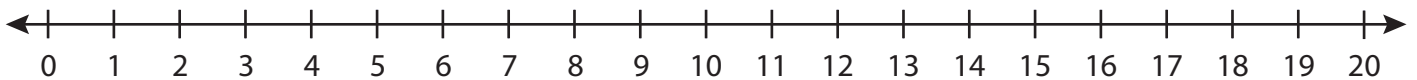
1)  $4 \times 3 =$  \_\_\_\_\_



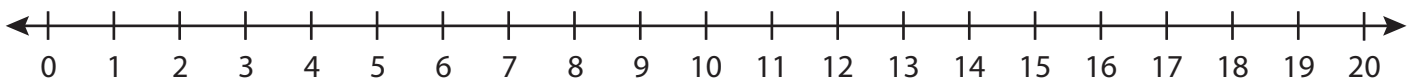
2)  $5 \times 2 =$  \_\_\_\_\_



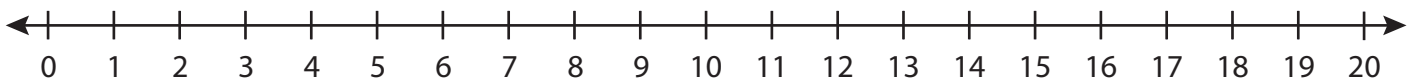
3)  $2 \times 4 =$  \_\_\_\_\_



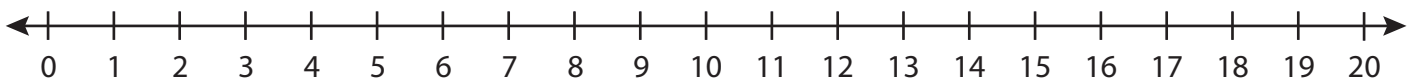
4)  $3 \times 5 =$  \_\_\_\_\_



5)  $9 \times 1 =$  \_\_\_\_\_



6)  $7 \times 2 =$  \_\_\_\_\_

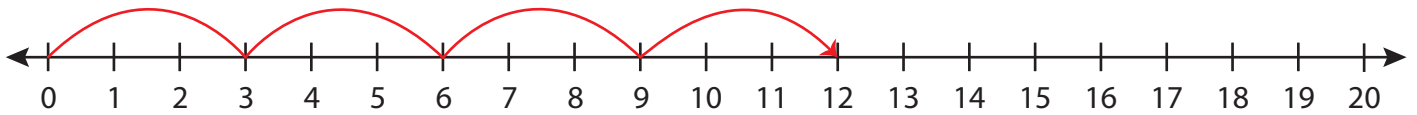


**Number Line Multiplication**

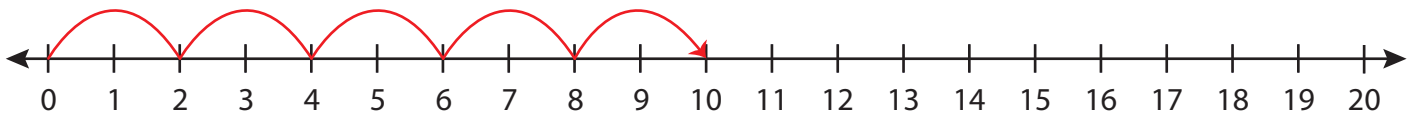
T1S1

Indicate hops on each number line and complete the multiplication sentences.

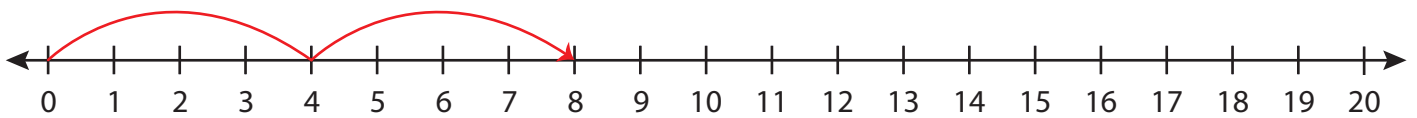
1)  $4 \times 3 = \underline{12}$



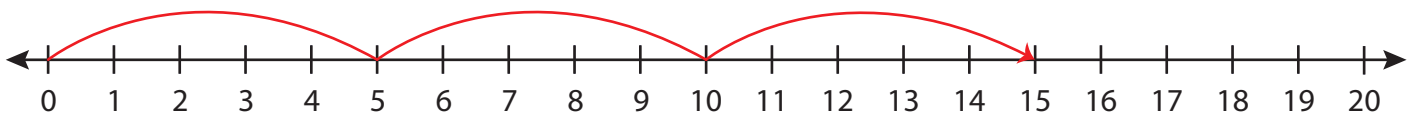
2)  $5 \times 2 = \underline{10}$



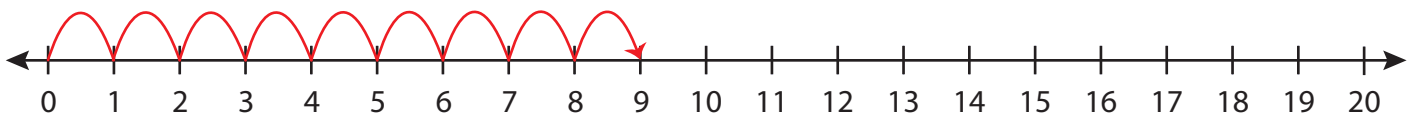
3)  $2 \times 4 = \underline{8}$



4)  $3 \times 5 = \underline{15}$



5)  $9 \times 1 = \underline{9}$



6)  $7 \times 2 = \underline{14}$

