






1) Name the shapes and identify one property of each:



Name: _____
Number of sides: _____




Name: _____
Number of vertices: _____



Name: _____
Property of your choice: _____

2) Circle the descriptions that match this shape:



I have 6 sides.

I have 5 vertices.

All my sides are the same length.

I am symmetrical.

1) Draw your own shape in the box which:

- has at least one acute angle (less than 90°);
- is symmetrical;
- has an odd number of sides.

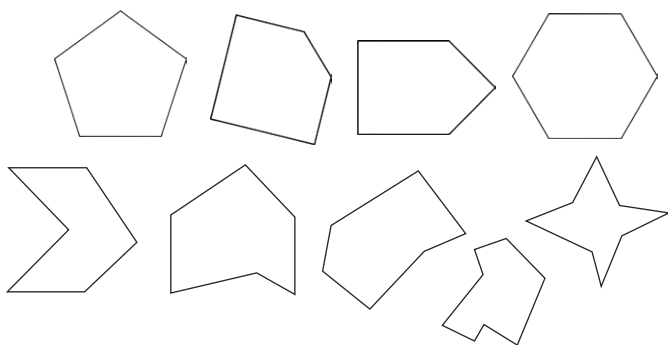


2) Quadrilaterals are always symmetrical.

Is this true? Explain your answer.



1) Colour the pentagons blue and the hexagons red. Leave any blank that are neither.



Why have you left those particular shapes blank?

2) Explain what these shapes have in common:

